









Activity - Addition symbol



Complete the number sentences then stick the correct total next to it.

 + 	
<input type="text"/> + <input type="text"/>	

 + 	
<input type="text"/> + <input type="text"/>	

 + 	
<input type="text"/> + <input type="text"/>	

 + 	
<input type="text"/> + <input type="text"/>	

 + 	
<input type="text"/> + <input type="text"/>	

8

3


5

2

9


Activity - Addition symbol

Complete the number sentences then stick the correct total next to it.




$$\square + \square$$

10




$$\square + \square$$

4




$$\square + \square$$

7



$$\square + \square$$


6



$$\square + \square$$


8

Answers - Activity - Addition symbol



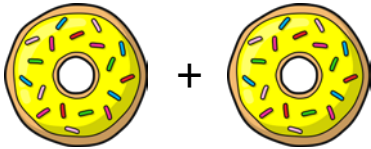
$$\boxed{3} + \boxed{2}$$

5




$$\boxed{6} + \boxed{3}$$

9



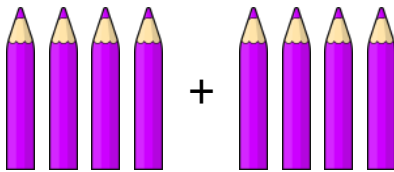
$$\boxed{1} + \boxed{1}$$

2



$$\boxed{2} + \boxed{1}$$

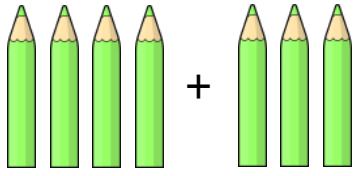
3



$$\boxed{4} + \boxed{4}$$


8

Activity - Addition symbol




$$\boxed{4} + \boxed{3}$$

7




$$\boxed{6} + \boxed{4}$$

10




$$\boxed{4} + \boxed{2}$$

6



$$\boxed{5} + \boxed{3}$$

8



$$\boxed{3} + \boxed{1}$$

4